
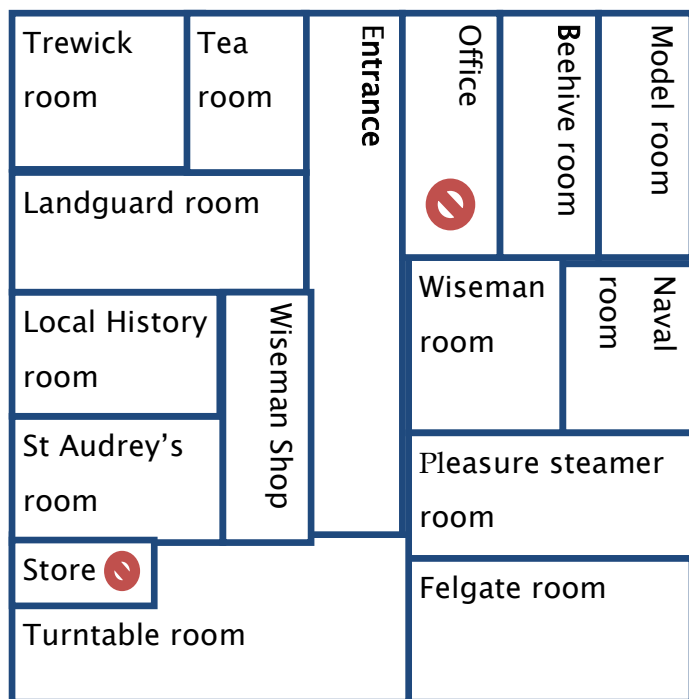


If you have time try the Owl Trail!



# Welcome to Felixstowe Museum

Come and explore!  
There is lots to discover inside.



Felixstowe Museum,  
Viewpoint Road,  
Felixstowe, Suffolk IP11 3TW

Email: [felmuseum@btopenworld.com](mailto:felmuseum@btopenworld.com)

Website: [www.felixstowemuseum.org](http://www.felixstowemuseum.org)

Telephone number: 01394 674355 (answer phone)

Refreshments are available in the tea room.

There is a plan on the back of this leaflet and an information sheet to help you.

Start at the Wiseman room 





Felixstowe was very important in the development of military aircraft. You will see lots of examples of different aeroplanes in these rooms.

Airmen and soldiers lived here 100 years ago.

Find the photograph of 230 Squadron.

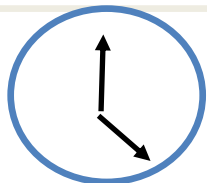
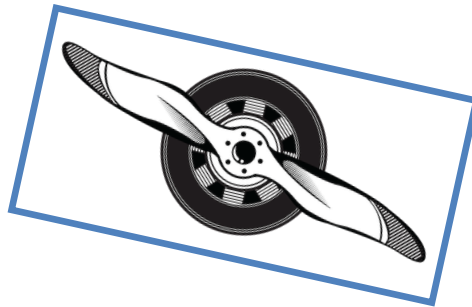
Estimate how many men are in the squadron.

\_\_\_\_\_ men

Lots of different aeroplanes were tested at Felixstowe.

Can you find an aeroplane with 2 propellers?

Draw it here:



There are 5 clocks in the Museum. Can you find the clock in this room? What time does it show?

Go to the Naval room



The oldest things in the Museum are in this room.

Archaeologists found these ancient artefacts by digging in the ground.

What is the oldest thing in this room?



**Well done!**

**Now head to the Museum Shop with your completed Trail Sheet, where we will have a look at your answers, help you with any you were stuck on, and award you with 1 hour of learning in your Passport to Learning.**



Find these things in the shop:

In 1950, Lyons Quick Brew tea cost 1s 6d for 4 ounces and Cadbury's Dairy Milk Assortment cost 2s for 8 ounces.

How much would they cost altogether?

Use the money sheet in the bag to find out how much they would cost in decimal money.

Go the Landguard room



On 2nd July 1667, the Dutch tried to invade Britain by attacking Felixstowe. Captain Darrell led the British to victory in a fierce battle. Lots of cannon balls have been found.

Can you find the pile of cannon balls in this room?

How many are there?

Go the Trewick room.



Find the ship transporting tanks.

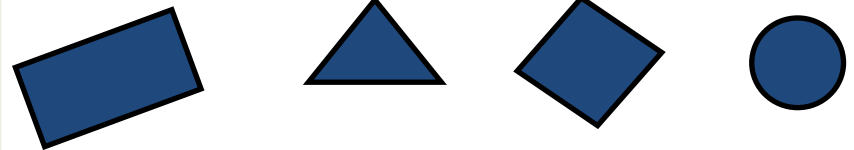
How many tanks are there on the ship?



Can you work out how the tanks got onto the ship?

Find the flags.

What shapes can you see in the flags? How many of each shape can you see?



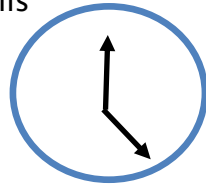
Flags have lots of different uses. A flag can be for decoration. A flag can be the symbol of a country. Flags can also be used to send messages.

What do you think these flags were used for?

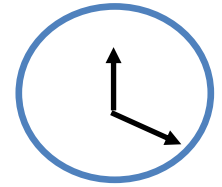
Go to the Beehive room



The biggest clock in the Museum is in this room. What time does it show?



Another clock is in this room.  
What time does it show?



**Go to the Local History room** 

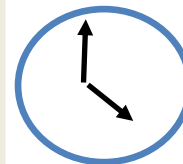


There were lots of activities for the holiday makers in Felix-stowe one hundred years ago.  
You could ride a donkey or in a cart pulled by a goat.

Look carefully at the photographs.

- How many donkeys can you count?
- How many goats can you count?

There is a clock on the mantelpiece.  
What time does it show?



**Go to the Wiseman's shop.** 

The clock is an analogue clock.

What time would it show if it were a 24 hour clock?

There is a table to help you on the information sheet.

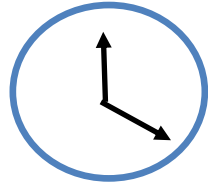
**Go to the Model room** 

There are lots of aeroplanes in this room!

- Can you estimate how many aeroplanes there are in the large display cabinet?
- How can you find out if you have made a close estimate?
- Can you find an aeroplane with 6 propellers?

There is another clock in this room.

What time does it show?




*Swinging sixties*

- How many ladies are there in this room?
- How many fingers do they have altogether?

Go to St Audrey's room



1



2



3

Can you match the sentences below to the aeroplanes above?

- This aeroplane has a fuselage shaped like a boat for landing on water.
- This aeroplane is small and fast for fighting.
- This aeroplane can carry passengers.

Go to the Pleasure Steamer room





Over 100 years ago, Felixstowe was a popular place to visit . Most people came by train but lots of people also came by boat.

Look carefully at the Southend Pride poster.

- How much was a single fare for an adult in a fore cabin?
- How much was a return fare for an adult in a saloon?

All the prices are in old money; pounds, shillings and pence. There is an information sheet in your bag about old money, you will need it when you get to the Wiseman shop.



A pier was built for the tourists. Look carefully at the photographs.

How long is the pier?

Go to the Turntable room 



Write down the telephone numbers that you can see on the van

- What do the 3 digits of the telephone number add up to?
- Can you guess why there are only 3 digits in the telephone numbers?

Draw the shapes that you can see on the turntable.

Go to the Felgate room 